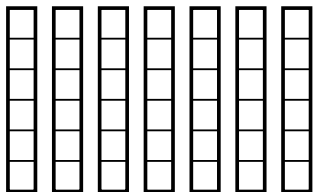


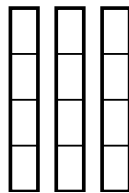


Use the visual models to solve.

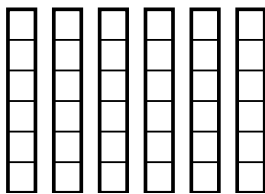
1) $\frac{4}{6} \times 7 =$



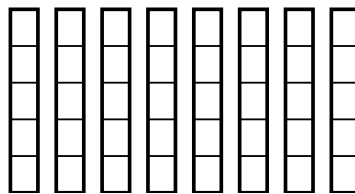
2) $\frac{1}{4} \times 3 =$



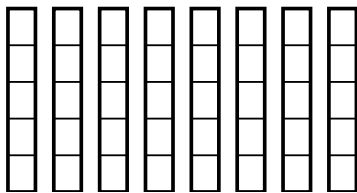
3) $\frac{4}{6} \times 6 =$



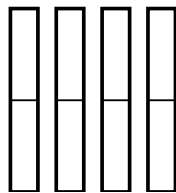
4) $\frac{1}{5} \times 8 =$



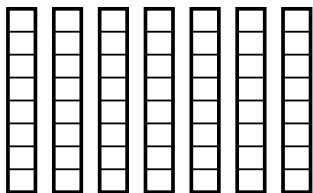
5) $\frac{4}{5} \times 8 =$



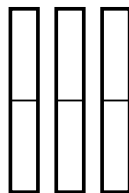
6) $\frac{1}{2} \times 4 =$



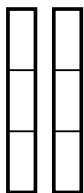
7) $\frac{1}{8} \times 7 =$



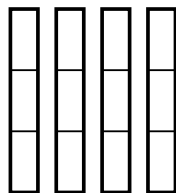
8) $\frac{1}{2} \times 3 =$



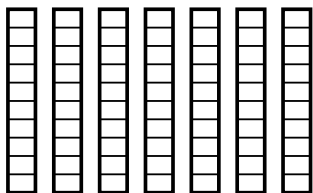
9) $\frac{1}{3} \times 2 =$



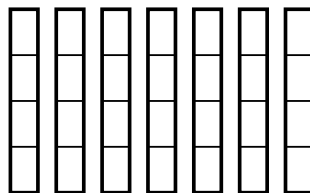
10) $\frac{2}{3} \times 4 =$



11) $\frac{3}{10} \times 7 =$



12) $\frac{2}{4} \times 7 =$



Answers

1. _____

2. _____

3. _____

4. _____

5. _____

6. _____

7. _____

8. _____

9. _____

10. _____

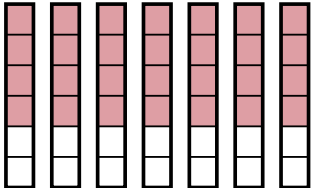
11. _____

12. _____

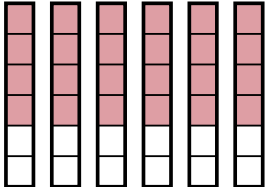


Use the visual models to solve.

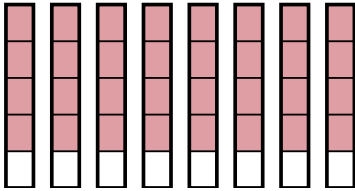
1) $\frac{4}{6} \times 7 =$



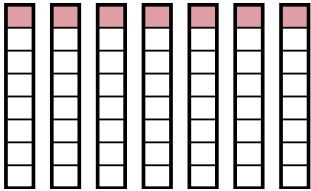
3) $\frac{4}{6} \times 6 =$



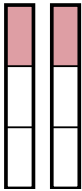
5) $\frac{4}{5} \times 8 =$



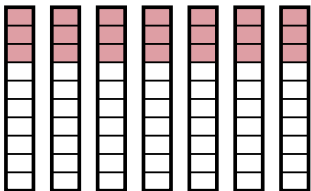
7) $\frac{1}{8} \times 7 =$



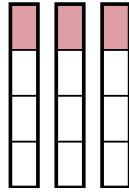
9) $\frac{1}{3} \times 2 =$



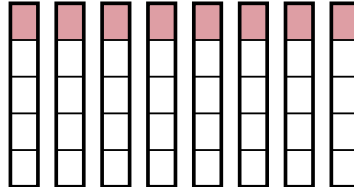
11) $\frac{3}{10} \times 7 =$



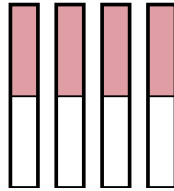
2) $\frac{1}{4} \times 3 =$



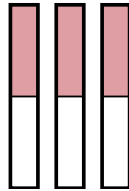
4) $\frac{1}{5} \times 8 =$



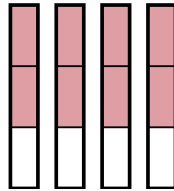
6) $\frac{1}{2} \times 4 =$



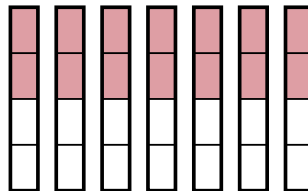
8) $\frac{1}{2} \times 3 =$



10) $\frac{2}{3} \times 4 =$



12) $\frac{2}{4} \times 7 =$



Answers

1. $\frac{28}{6}$

2. $\frac{3}{4}$

3. $\frac{24}{6}$

4. $\frac{8}{5}$

5. $\frac{32}{5}$

6. $\frac{4}{2}$

7. $\frac{7}{8}$

8. $\frac{3}{2}$

9. $\frac{2}{3}$

10. $\frac{8}{3}$

11. $\frac{21}{10}$

12. $\frac{14}{4}$